



Class: EM - CLASS 2

Date: 04-08-2025

TickMark.Ai
Mumbai

Subject: Mathematics

Paper: Unit 1



Time: 1 hrs

Marks: 20

Q1) Fill in the blanks :

(2)

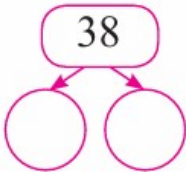
(1) Mamma roasted rotis that were in shape. (star / rectangle / circle)

(2) The expanded form of 94 is (9 + 40 / 90 + 4 / 9 + 4)


Q2) Solve the following :

(5)

(1) Write the place value of each digit of the following number.




(2) Make group of 10 beads. Count and write the number of beads.



= _____

(3) Write whether the following objects will slide or roll.



.....

(4) Tick the correct shape of the vegetable shown below.




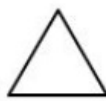
Triangle

Long

Circle

(5) Identify the shape and tick the correct shape.

Circle



Q3) Write the following words in numbers :

(1)

Twenty-five = _____

Q4) Write the following number in words :

(1)

44 = _____

Q5) Write the expanded form of the following numbers :

(1)

35 = _____

Q6) Write the place value of the underlined digit :

(1)

72 - The place value of 7 is

Q7) Write the number from its expanded form :

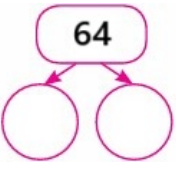
(1)

60 + 5 = _____


Q8) Solve the following :

(4)

(1) Write the expanded form of the following numbers.

Number	Number in words	Expanded form
		

(2) Look at the picture and write the place value of each digit.



Q9) Match the column :

(4)

Column "A"

Column "B"

(1) _____

Sloping line

(2) 

Curved line

(3) 

Vertical line

(4) 

Horizontal line

All the Best