



Class: EM - CLASS 2

Date: 08-10-2025

Subject: Mathematics

Paper: Semester 1

Time:1 hrs

Marks:20

Roll No.:

Student Name:

Div.:

1) Fill in the blanks

(2)

(1) Count in steps of 2: 2, 4, 6, _____ , _____

(2) Addition by counting forward: $25 + 3 =$ _____ (26 / 27 / 28)

2) Write the proper number in the blanks

(2)

(1) $78 + 0 =$ _____

(2) $6 +$ _____ $= 6$

3) Tick the correct answer

(2)

(1) $35 - 4 =$ _____

(a) 31

(b) 30

(2) $28 -$ _____ $= 21$

(a) 7

(b) 6

4) Solve the following

(2)

(1)

T	U
3	7
+	2

(2) There are 8 paper lanterns and 4 lamps. How many more lanterns are there than the lamps ?



5) Read the word problems and solve the following questions

(4)

(1) There were 16 bananas in a basket. Manpreet added some bananas to the basket and then there were 29 bananas in it. How many bananas did Manpreet add ?

+	

(2) Rama has 8 peanuts and Yash has 7. How many do they have together ?

+

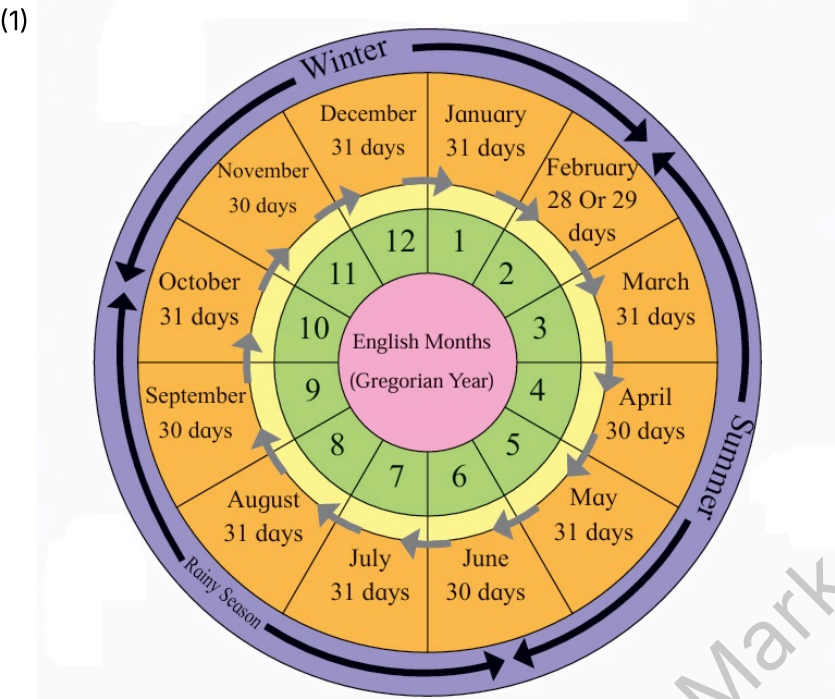
Rama’s peanuts

Yash’s peanuts

Total peanuts

6) Observe the picture and answer the following questions

(4)



- (1) How many months have 31 days in the whole year?
(2) Name the season that comes after the rainy season.

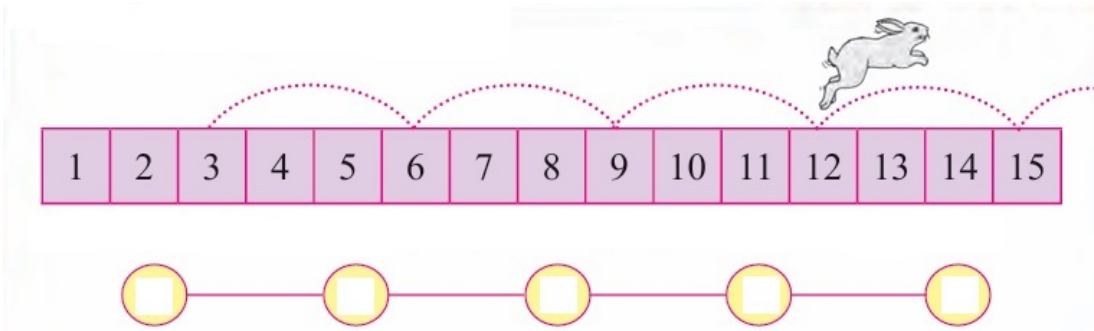
(2) What are the names of the months on the coaches under the bridge ?



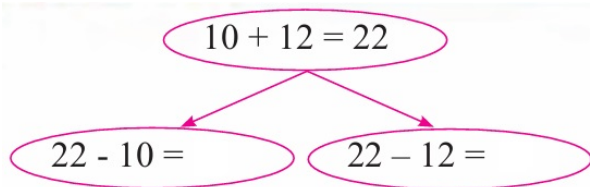
7) Solve the following

(4)

(1) Look at the rabbit's jump. Write the numbers from which the rabbit takes a jump.



(2)



All the Best

TickMark.Ai