



Class: EM - CLASS 1

Date: 06-10-2025

Subject: Mathematics

Paper: Semester 1

Time: 1 hrs

Marks: 20

Roll No.:

Student Name:

Div.:

1) Fill in the blanks

(2)

(1)  $2 + 7 = \underline{\hspace{2cm}}$

(2) 1 ten + 6 units =  $\underline{\hspace{2cm}}$  (16 / 61)

2) Count and write the numbers

(2)



(1)  =  $\underline{\hspace{2cm}}$

(2)  =  $\underline{\hspace{2cm}}$

3) Observe the pictures and solve the following

(2)

(1)  +  =  $\underline{\hspace{2cm}}$   
5 + 4 =  $\underline{\hspace{2cm}}$

(2)  -  =  $\underline{\hspace{2cm}}$   
5 - 0 =  $\underline{\hspace{2cm}}$







4) Solve the following

(2)

(1) Put a tick (✓) in the box below the picture having less objects.

 -  $\underline{\hspace{2cm}}$        -  $\underline{\hspace{2cm}}$

(2) Tick (✓) the one who arranged the balls in the correct order from the biggest to the smallest according to the size.

Sarina	  	
Aman	  	

5) Write 'L' for Less objects and 'M' for more objects

(1)

 -  $\underline{\hspace{2cm}}$        -  $\underline{\hspace{2cm}}$

6) Write the following numbers in words

(1)

20 =  $\underline{\hspace{2cm}}$

7) Write the following words in figures

(1)

Thirteen = \_\_\_\_\_

8) What number comes before

(1)

\_\_\_\_\_ - 14

9) What number comes in between

(1)

12 \_\_\_\_\_ 14

10) Write the numbers in the ascending order

(1)

Numbers	Ascending order
2, 6, 4, 9	

11) Write the numbers in the descending order

(1)

Numbers	Descending order
7, 5, 1, 3	

12) Write the bigger and smaller number in the correct column

(1)

Number	Smaller number	Bigger number
11, 18		

13) Read the word problems and solve the following questions

(2)

Jiya has 5 beads and Parmeet has 3 beads. How many beads do they have together ?

	Jiya's beads
+	Parmeet's beads
	Total beads

14) Solve the following

(2)

There were 3 pencils with Samira. She gave 1 pencil to her friend. How many pencils are left with Samira now ?

	Pencils Samira had
-	Pencils given to her friend
	Pencils left.

All the Best