



Class: EM - CLASS 1

Date: 04-08-2025

Subject: Mathematics

Paper: Unit 1

Time: 1 hrs

Marks: 20

Q1) Fill in the missing numbers :

(2)

- (1) _____ 1 2 _____ 4
- (2) 6 _____ 8 _____ 10

Q2) Count and write the numbers :

(2)

- (1)      = _____
- (2)         = _____


Q3) Solve the following :

(5)

- (1) Tick (✓) the cat that is in front of the box.

☐☐

- (2) Circle (○) the house that is near.



- (3) Count the pictures and circle (○) the correct number of objects.




8 9 3

(4) Observe the picture and tick (✓) the correct word.



The cock is standing on a thick / thin pole.

(5) Tick (✓) the box that shows the activity 'After.'


☐

☐

Q4) Write the following numbers in words :

(1)

0 = _____

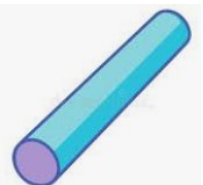
Q5) Write the following words in numbers :

(1)

Ten = _____

Q6) Tick the following objects as rolling and sliding :

(1)



Rolling _____

Sliding _____

Q7) Solve the following :

(4)

(1) Draw the number of beads equal to the given number.

3	
---	--

(2)

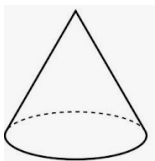


- (1) Who is the nearest to the well ? (Man / Lady / Boy)
(2) Who is the farthest from the well ? (Boy / Bucket / Dog)

Q8) Match the column :

(4)

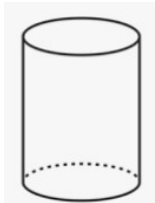
(1)



(a)



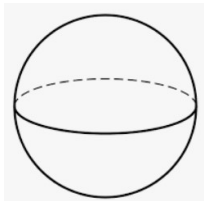
(2)



(b)



(3)



(c)



(4)



(d)



All the Best